

Name _____

Date _____

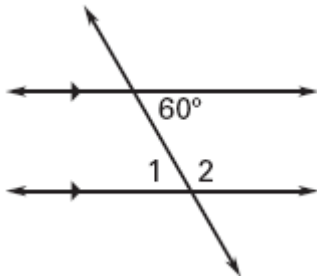
LESSON 3.2

Practice B

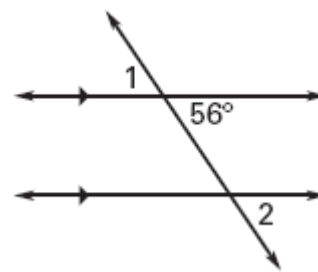
For use with pages 153–160

Find $m\angle 1$ and $m\angle 2$.

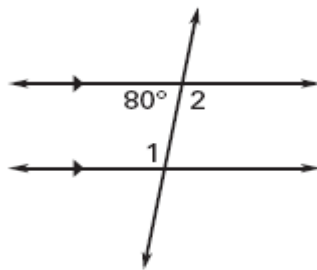
1.



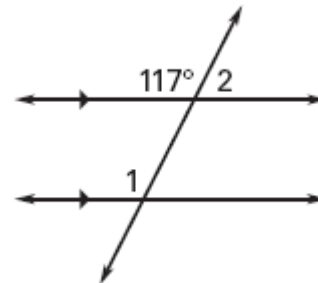
2.



3.

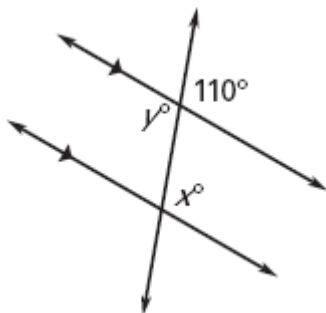


4.

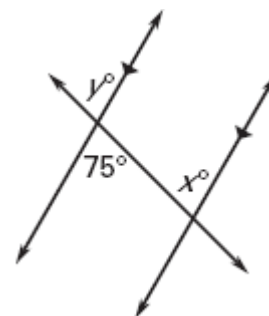


Find the values of x and y .

5.

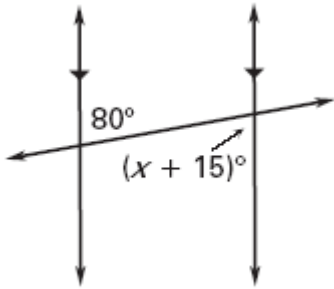


6.

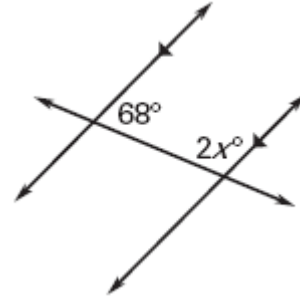


Find the value of x .

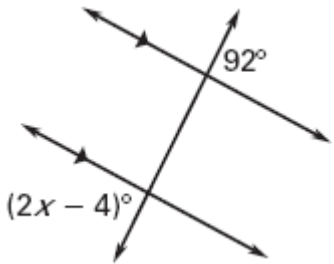
7.



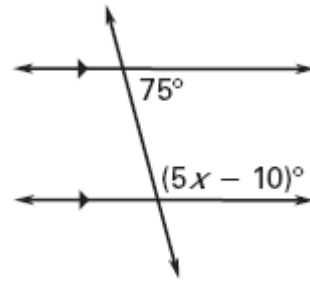
8.



9.



10.



11. Complete the two-column proof.

GIVEN: $p \perp q$, $q \parallel r$

PROVE: $p \perp r$

Statements	Reasons

